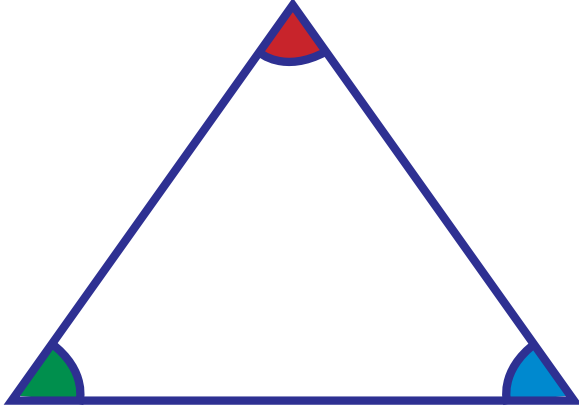


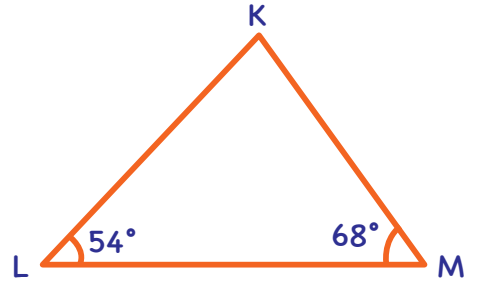
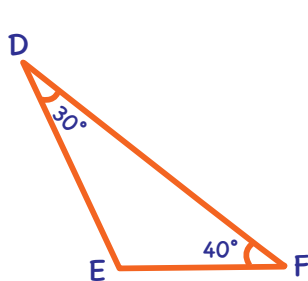
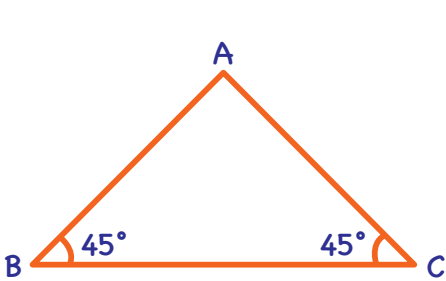
ÜÇGENİN İÇ AÇILARININ ÖLÇÜLERİ TOPLAMI



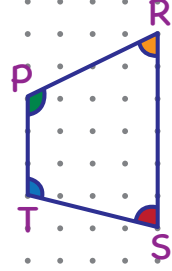
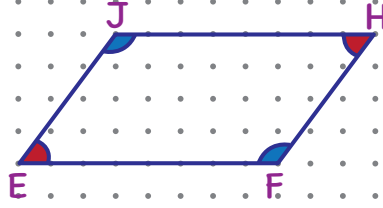
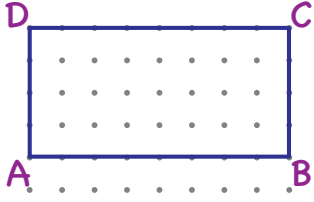
İMT Hoca

PEKİŞTİRELİM

Aşağıdaki üçgenlerde ölçüsü verilmeyen açılarının ölçüsünün kaç derece olduğunu bulalım.



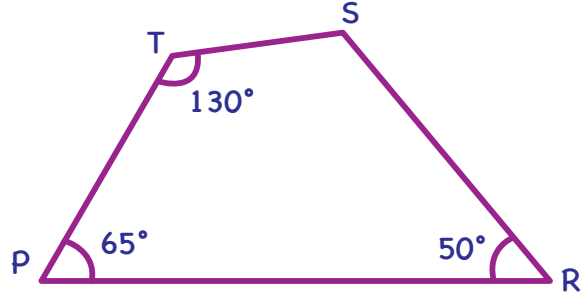
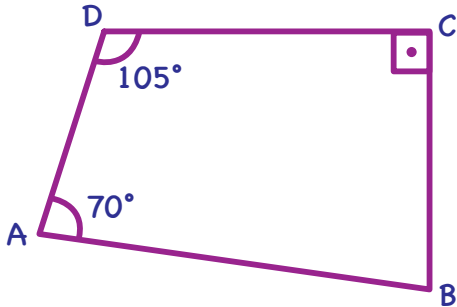
DÖRTGENİN İÇ AÇILARININ ÖLÇÜLERİ TOPLAMI



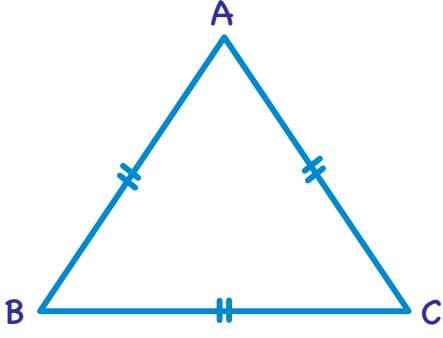
İMT Hoca

PEKİŞTİRELİM

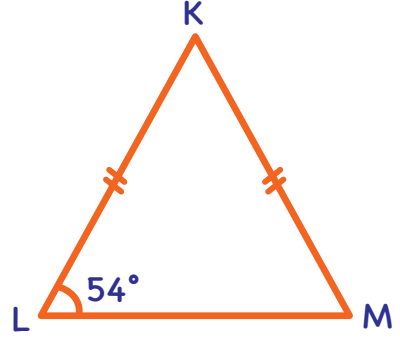
Aşağıdaki dörtgenlerde ölçüsü verilmeyen açılarının ölçüsünün kaç derece olduğunu bulalım.



PEKİŞTİRELİM



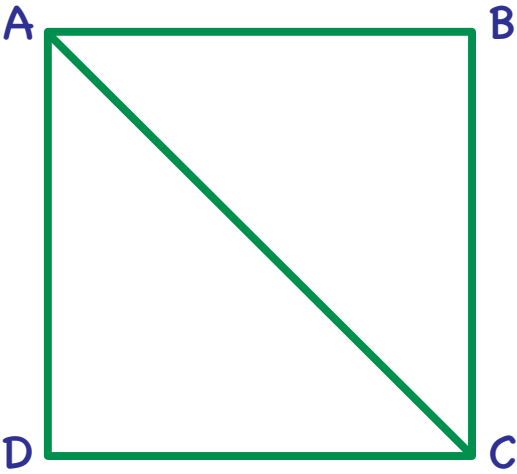
ABC eşkenar üçgeninin bir iç açı ölçüsünü bulalım.



KLM ikizkenar üçgeninde K açısının ölçüsünü bulalım.

İMT Hoca

PEKİŞTİRELİM



ABCD karesinde ACD açısının ölçüsünü bulalım.